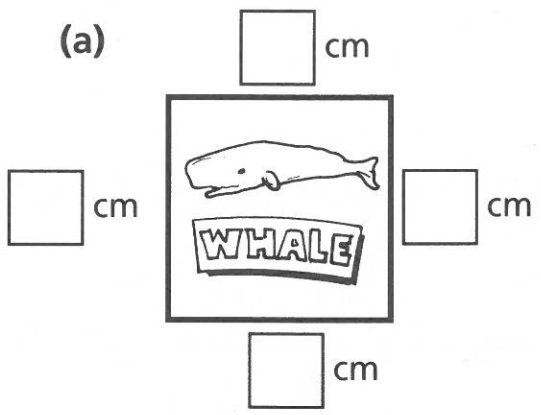


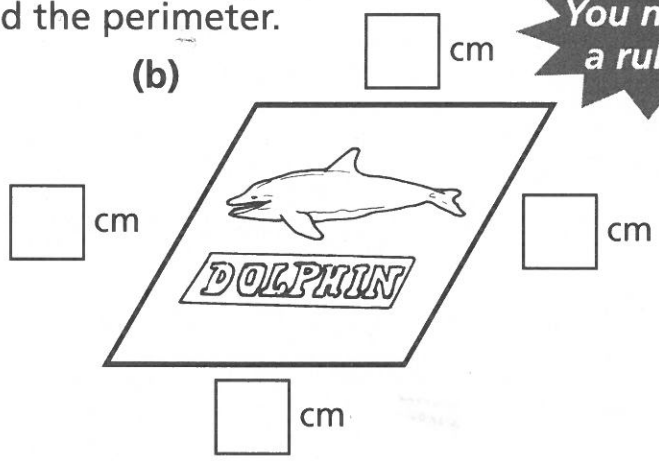
1 For each of these badges

- measure the lengths of the sides
- find the perimeter.

You need a ruler.



Perimeter _____ cm



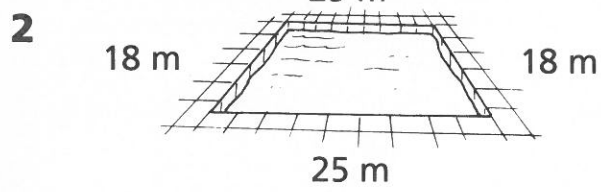
Perimeter _____ cm



Perimeter _____

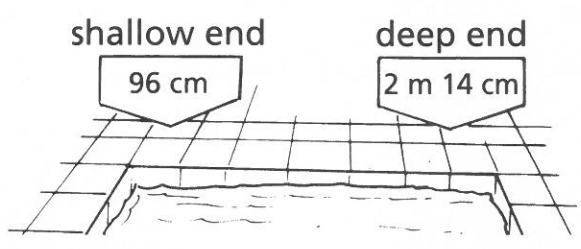


Perimeter _____



Calculate the perimeter of this pool. _____ m

3 Find the difference in depth between the deep end and the shallow end of this pool.



4 Find the lengths of these rafts in metres and centimetres.

