


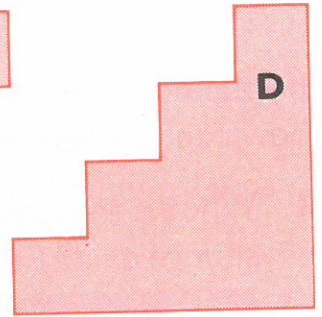





- 1 Measure the sides of these rectangles and then find their areas.




- 2 Find the areas of these shapes which are made from rectangles.



## Shapes with the same area

- 3 You can arrange 24 square centimetres to form different rectangles. Two have been done for you.



- Make up some more of your own using 24 square centimetres.
- Do the same with 36 square centimetres.
- Do the same with 48 square centimetres.