

1 Superhero and Mog take food and water to the emergency area.

They give each person

- 4 l of milk
- 7 kg of vita-bics
- 6 kg of dried soup
- 5 kg of rice
- 9 l of water.

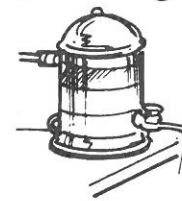


How much of each item did Superhero and Mog give?


milk vita-bics dried soup rice water

2 (a) $\begin{array}{r} 3215 \\ \times 2 \\ \hline \end{array}$ (b) $\begin{array}{r} 743 \\ \times 8 \\ \hline \end{array}$ (c) $\begin{array}{r} 3605 \\ \times 3 \\ \hline \end{array}$ (d) $\begin{array}{r} 2089 \\ \times 7 \\ \hline \end{array}$ (e) $\begin{array}{r} 863 \\ \times 9 \\ \hline \end{array}$


Mog buys emergency equipment with the money she has raised.



water purifier
£1614



large tent
£2030



generator
£1402



mobile surgery
£2613

- 1 How much does it cost to buy
(a) 4 water purifiers (b) 8 tents
(c) 9 generators (d) 5 mobile surgeries?

2 How much does it cost Mog to buy 4125 packs of sterilising tablets at £8 per pack?

- 3 Find the cost of
(a) 1264 boxes of knives at £9
(b) 2138 boxes of forks at £7
(c) 3275 boxes of spoons at £5.

